

2.Sınıf Verilmeyen Toplananı Bulma

Verilmeyen Toplananı Bulma

Aşağıdaki verilmeyen toplananları örnekteki gibi yapınız.

$$\begin{array}{r} 23 \\ + 33 \\ \hline 56 \end{array}$$
$$32 \rightarrow \square$$
$$44 \rightarrow \square$$

Verilmeyen Toplananı Bulma

Aşağıdaki verilmeyen toplananları örnekteki gibi yapınız.

$$\begin{array}{r} \square \\ + 23 \\ \hline 66 \end{array}$$

$$\begin{array}{r} 35 \\ + 21 \\ \hline 56 \end{array}$$
$$\begin{array}{r} 56 \\ - 35 \\ \hline 21 \end{array}$$

$$\begin{array}{r} 25 \\ + \square \\ \hline 54 \end{array}$$

$$\begin{array}{r} 32 \\ + \square \\ \hline 76 \end{array}$$
$$\begin{array}{r} \square \\ - \square \\ \hline \square \end{array}$$

$$\begin{array}{r} \square \\ + 22 \\ \hline 81 \end{array}$$

$$\begin{array}{r} 20 \\ + \square \\ \hline 78 \end{array}$$
$$\begin{array}{r} \square \\ - \square \\ \hline \square \end{array}$$

Verilmeyen Toplananı Bulma

Aşağıdaki verilmeyen toplananları çıkarma işlemi yaparak bulunuz.

$$\begin{array}{r} 21 \\ + \square \\ \hline 56 \end{array}$$

$$\begin{array}{r} 33 \\ + \square \\ \hline 43 \end{array}$$

$$\begin{array}{r} \square \\ + 24 \\ \hline 65 \end{array}$$

$$\begin{array}{r} \square \\ + 30 \\ \hline 65 \end{array}$$

$$\begin{array}{r} 38 \\ + \square \\ \hline 71 \end{array}$$


$$\begin{array}{r} 27 \\ + \square \\ \hline 83 \end{array}$$


$$\begin{array}{r} \square \\ + 26 \\ \hline 50 \end{array}$$


$$\begin{array}{r} \square \\ + 55 \\ \hline 82 \end{array}$$


Verilmeyen Toplananı Bulma


Aşağıdaki verilmeyen toplananları örnekteki gibi yapınız.



$$\begin{array}{r} 35 \\ + \boxed{21} \\ \hline 56 \end{array} \quad \begin{array}{r} 56 \\ - 35 \\ \hline 21 \end{array}$$



$$\begin{array}{r} 23 \\ + \boxed{} \\ \hline 54 \end{array} \quad \begin{array}{r} \boxed{} \\ - \boxed{} \\ \hline \boxed{} \end{array}$$



$$\begin{array}{r} 48 \\ + \boxed{} \\ \hline 76 \end{array} \quad \begin{array}{r} \boxed{} \\ - \boxed{} \\ \hline \boxed{} \end{array}$$



$$\begin{array}{r} 32 \\ + \boxed{} \\ \hline 76 \end{array} \quad \begin{array}{r} \boxed{} \\ - \boxed{} \\ \hline \boxed{} \end{array}$$


$$\begin{array}{r} 12 \\ + \boxed{} \\ \hline 38 \end{array} \quad \begin{array}{r} \boxed{} \\ - \boxed{} \\ \hline \boxed{} \end{array}$$


$$\begin{array}{r} 54 \\ + \boxed{} \\ \hline 98 \end{array} \quad \begin{array}{r} \boxed{} \\ - \boxed{} \\ \hline \boxed{} \end{array}$$


$$\begin{array}{r} 20 \\ + \boxed{} \\ \hline 78 \end{array} \quad \begin{array}{r} \boxed{} \\ - \boxed{} \\ \hline \boxed{} \end{array}$$


$$\begin{array}{r} 30 \\ + \boxed{} \\ \hline 96 \end{array} \quad \begin{array}{r} \boxed{} \\ - \boxed{} \\ \hline \boxed{} \end{array}$$


$$\begin{array}{r} 50 \\ + \boxed{} \\ \hline 70 \end{array} \quad \begin{array}{r} \boxed{} \\ - \boxed{} \\ \hline \boxed{} \end{array}$$

Verilmeyen Toplananı Bulma

Aşağıdaki verilmeyen toplananları örnekteki gibi yapınız.

$$\begin{array}{r} 23 \\ + 33 \\ \hline 56 \end{array} \quad \begin{array}{r} 56 \\ - 23 \\ \hline 33 \end{array}$$

$$\begin{array}{r} 32 \\ + \square \\ \hline 78 \end{array} \quad \begin{array}{r} \square \\ - \square \\ \hline \square \end{array}$$

$$\begin{array}{r} 44 \\ + \square \\ \hline 67 \end{array} \quad \begin{array}{r} \square \\ - \square \\ \hline \square \end{array}$$

$$\begin{array}{r} \square \\ + 23 \\ \hline 66 \end{array} \quad \begin{array}{r} \square \\ - \square \\ \hline \square \end{array}$$

$$\begin{array}{r} \square \\ + 54 \\ \hline 86 \end{array} \quad \begin{array}{r} \square \\ - \square \\ \hline \square \end{array}$$

$$\begin{array}{r} \square \\ + 42 \\ \hline 98 \end{array} \quad \begin{array}{r} \square \\ - \square \\ \hline \square \end{array}$$

$$\begin{array}{r} 25 \\ + \square \\ \hline 54 \end{array} \quad \begin{array}{r} \square \\ - \square \\ \hline \square \end{array}$$

$$\begin{array}{r} 43 \\ + \square \\ \hline 62 \end{array} \quad \begin{array}{r} \square \\ - \square \\ \hline \square \end{array}$$

$$\begin{array}{r} 26 \\ + \square \\ \hline 70 \end{array} \quad \begin{array}{r} \square \\ - \square \\ \hline \square \end{array}$$

$$\begin{array}{r} \square \\ + 22 \\ \hline 81 \end{array} \quad \begin{array}{r} \square \\ - \square \\ \hline \square \end{array}$$

$$\begin{array}{r} \square \\ + 63 \\ \hline 80 \end{array} \quad \begin{array}{r} \square \\ - \square \\ \hline \square \end{array}$$

$$\begin{array}{r} \square \\ + 46 \\ \hline 93 \end{array} \quad \begin{array}{r} \square \\ - \square \\ \hline \square \end{array}$$

Verilmeyen Toplananı Bulma

Aşağıdaki verilmeyen toplananları çıkarma işlemi yaparak bulunuz.

$$\begin{array}{r} 21 \\ + \square \\ \hline 56 \end{array}$$

$$\begin{array}{r} 33 \\ + \square \\ \hline 43 \end{array}$$

$$\begin{array}{r} \square \\ + 24 \\ \hline 65 \end{array}$$

$$\begin{array}{r} \square \\ + 30 \\ \hline 65 \end{array}$$

$$\begin{array}{r} 38 \\ + \square \\ \hline 71 \end{array}$$

$$\begin{array}{r} 27 \\ + \square \\ \hline 83 \end{array}$$

$$\begin{array}{r} \square \\ + 26 \\ \hline 50 \end{array}$$

$$\begin{array}{r} \square \\ + 55 \\ \hline 82 \end{array}$$